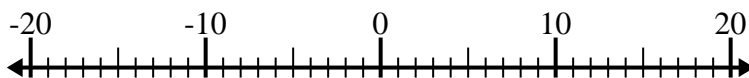


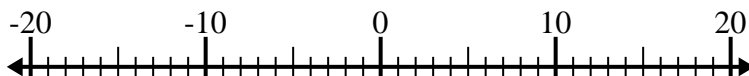


Solve each problem. Use the numberline if needed.

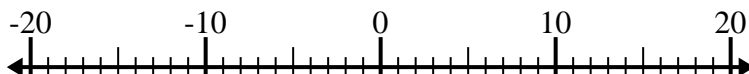
1) $(-7) + (-2) =$ _____



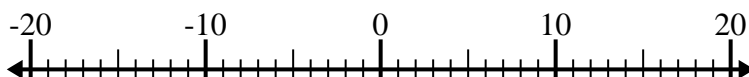
2) $(-11) + (-8) =$ _____



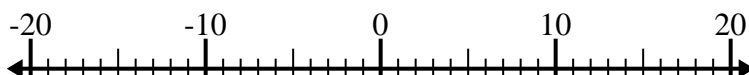
3) $(-11) - (-6) =$ _____



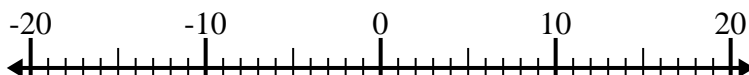
4) $13 + (-3) =$ _____



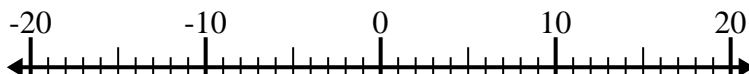
5) $(-11) - 5 =$ _____



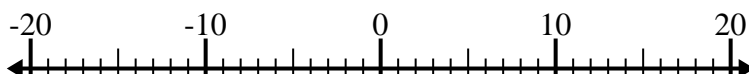
6) $(-10) - (-6) =$ _____



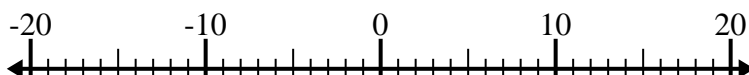
7) $7 - (-6) =$ _____



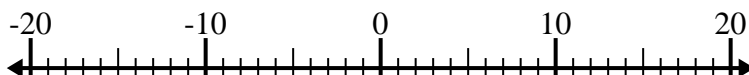
8) $(-11) + 13 =$ _____



9) $12 + (-3) =$ _____



10) $(-7) - 13 =$ _____

**Answers**

1. _____

2. _____

3. _____

4. _____

5. _____

6. _____

7. _____

8. _____

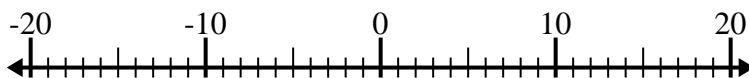
9. _____

10. _____

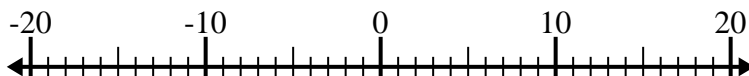


Solve each problem. Use the numberline if needed.

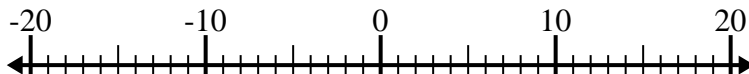
1) $(-7) + (-2) = \underline{-9}$



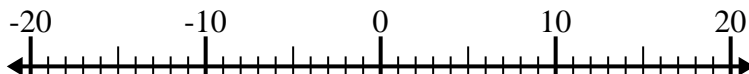
2) $(-11) + (-8) = \underline{-19}$



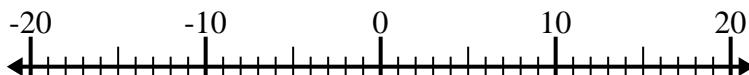
3) $(-11) - (-6) = \underline{-5}$



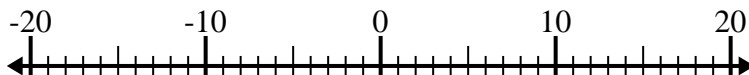
4) $13 + (-3) = \underline{10}$



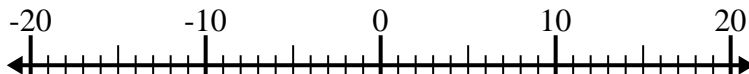
5) $(-11) - 5 = \underline{-16}$



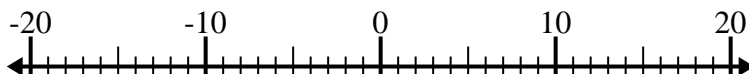
6) $(-10) - (-6) = \underline{-4}$



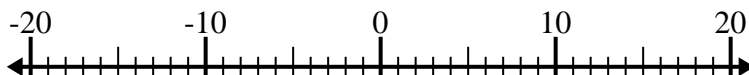
7) $7 - (-6) = \underline{13}$



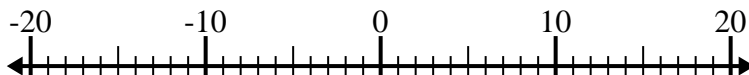
8) $(-11) + 13 = \underline{2}$



9) $12 + (-3) = \underline{9}$



10) $(-7) - 13 = \underline{-20}$

**Answers**1. **-9**2. **-19**3. **-5**4. **10**5. **-16**6. **-4**7. **13**8. **2**9. **9**10. **-20**